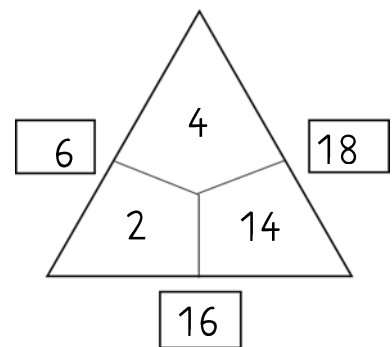
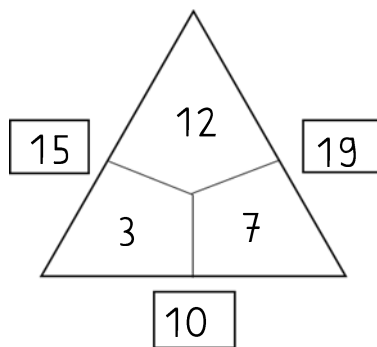
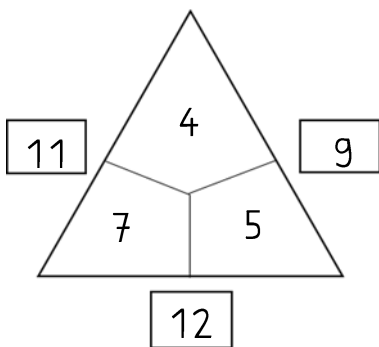
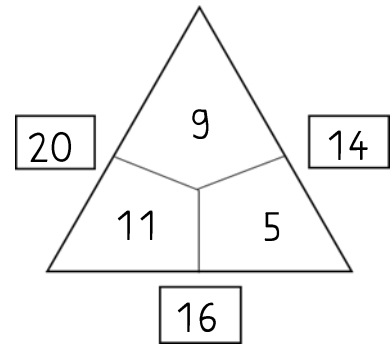
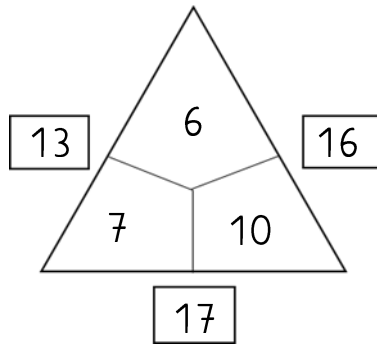
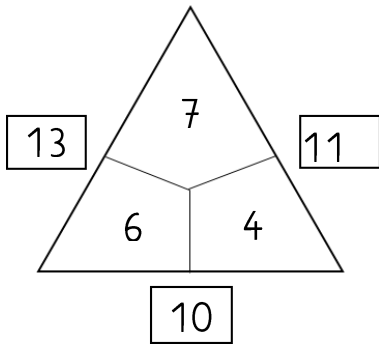


Fact family triangles 6 (Answerkey)

1. Fill in the correct numbers.



2. We practice calculating.

$5 + 8 = 13$

$12 - 5 = 7$

$6 + 11 = 17$

$5 + 7 = 12$

$12 - 8 = 4$

$7 + 12 = 19$

$7 + 7 = 14$

$13 - 8 = 5$

$12 - 6 = 6$

$11 + 6 = 17$

$18 - 5 = 13$

$20 - 8 = 12$

$14 + 6 = 20$

$16 - 5 = 11$

$20 - 18 = 2$

$13 + 6 = 19$

$16 - 8 = 8$

$15 + 3 = 18$