
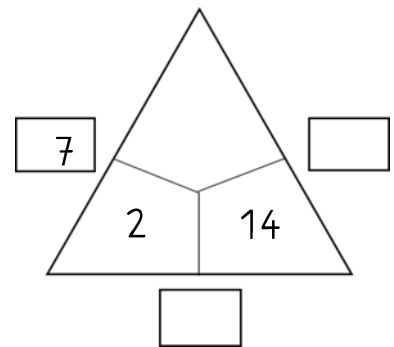
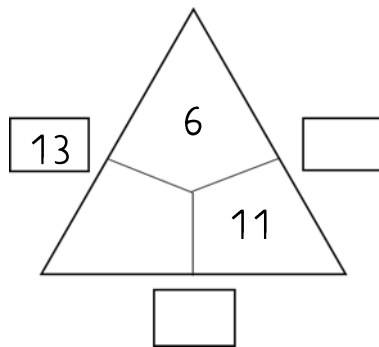
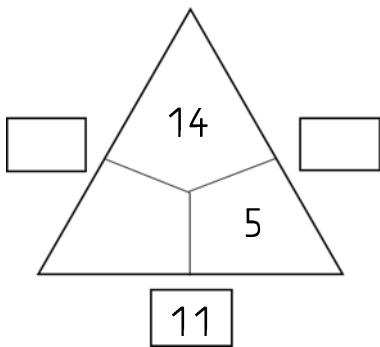
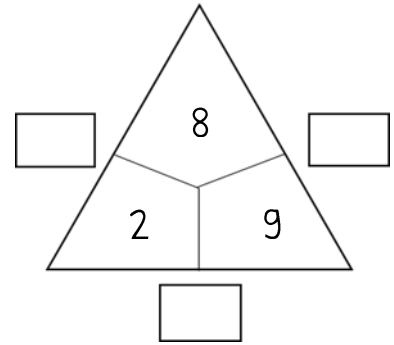
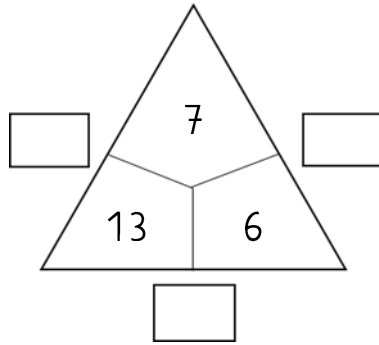
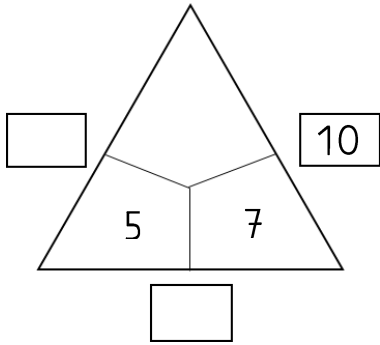


Fact family triangles 7



1. Fill in the correct numbers.



2. We practice calculating.

$6 + 7 = \underline{\quad}$

$12 + 7 = \underline{\quad}$

$1 + 12 = \underline{\quad}$

$9 - 2 = \underline{\quad}$

$20 - 9 = \underline{\quad}$

$14 - 6 = \underline{\quad}$

$13 + 4 = \underline{\quad}$

$20 - 4 = \underline{\quad}$

$17 - 14 = \underline{\quad}$

$9 + 6 = \underline{\quad}$

$16 - 3 = \underline{\quad}$

$13 - 4 = \underline{\quad}$

$8 - 5 = \underline{\quad}$

$16 + 2 = \underline{\quad}$

$12 - 3 = \underline{\quad}$

$10 - 7 = \underline{\quad}$

$16 - 8 = \underline{\quad}$

$15 + 4 = \underline{\quad}$