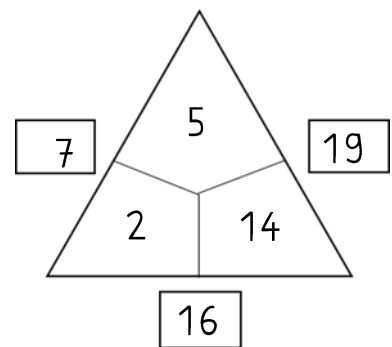
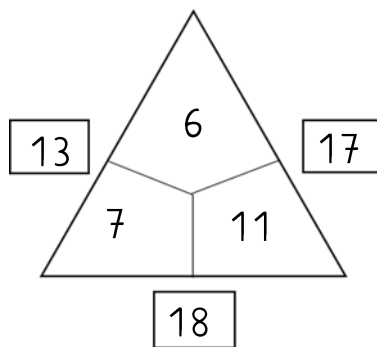
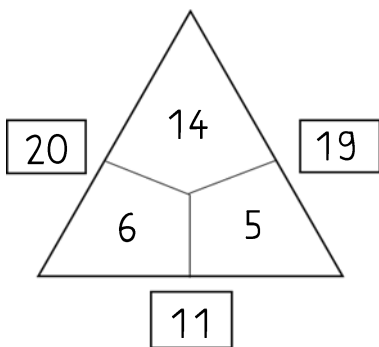
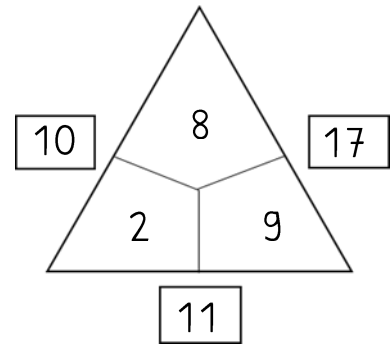
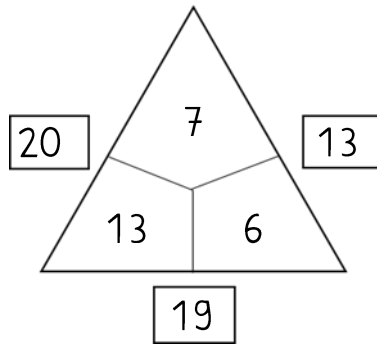
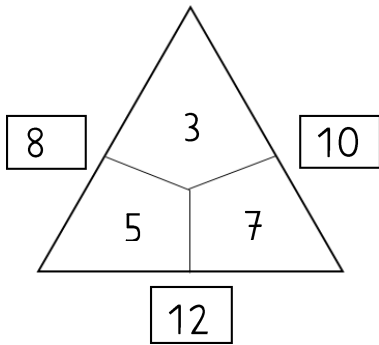


Fact family triangles 7 (Answerkey)

1. Fill in the correct numbers.



2. We practice calculating.

$$6 + 7 = 13$$

$$12 + 7 = 19$$

$$1 + 12 = 13$$

$$9 - 2 = 7$$

$$20 - 9 = 11$$

$$14 - 6 = 8$$

$$13 + 4 = 17$$

$$20 - 4 = 16$$

$$17 - 14 = 3$$

$$9 + 6 = 15$$

$$16 - 3 = 13$$

$$13 - 4 = 9$$

$$8 - 5 = 3$$

$$16 + 2 = 18$$

$$12 - 3 = 9$$

$$10 - 7 = 3$$

$$16 - 8 = 8$$

$$15 + 4 = 19$$